

Please write clearly in block capitals.

Centre number

--	--	--	--	--

Candidate number

--	--	--	--

Surname

Forename(s)

Candidate signature

A-level PHYSICS A

Unit 4 Fields and Further Mechanics Section A

Thursday 15 June 2017

Morning

Time allowed: The total time for both sections of this paper is 1 hour 45 minutes. You are advised to spend approximately 45 minutes on this section.

Materials

In addition to this paper you will require:

- an objective test answer sheet
- a black ball-point pen
- a calculator
- a question paper/answer book for Section B (enclosed)
- a Data and Formulae booklet.

Instructions

- Use a black ball-point pen.
- Answer **all** questions in this section.
- For each question there are four responses. When you have selected the response which you think is the most appropriate answer to a question, mark this response on your answer sheet.
- Mark all responses as instructed on your answer sheet. If you wish to change your answer to a question, follow the instructions on your answer sheet.
- Do all rough work in this book **not** on the answer sheet.

Information

- The maximum mark for this section is 25.
- All questions in Section A carry equal marks. No deductions will be made for incorrect answers.
- *A Data and Formulae Booklet* is provided as a loose insert.
- The question paper/answer book for Section B is enclosed within this question paper.

Multiple choice questions

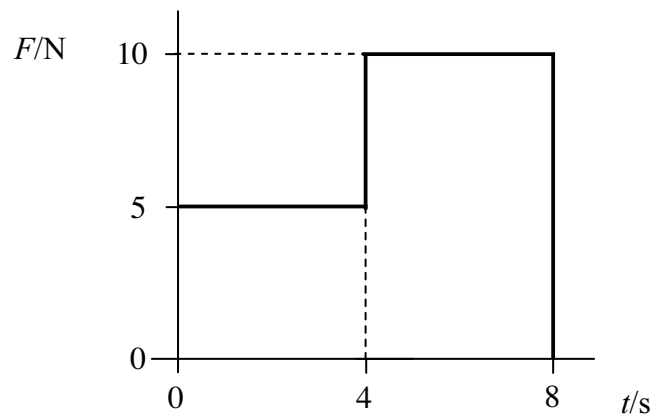
Each of Questions **1** to **25** is followed by four responses, **A**, **B**, **C** and **D**. For each question select the best response and mark its letter on the answer sheet.

You are advised to spend about **45 minutes** on this section.

- 1** A ball of mass 0.40 kg falls vertically to the floor. It strikes the floor at a speed of 5.9 m s^{-1} and then rebounds vertically at a speed of 4.9 m s^{-1} .
- What is the magnitude of the change of momentum of the ball during its collision with the floor?

- A** 0.44 N s
- B** 1.2 N s
- C** 4.3 N s
- D** 4.7 N s

- 2** An object which is initially at rest is acted on by a force F which varies with time t as shown by the graph.

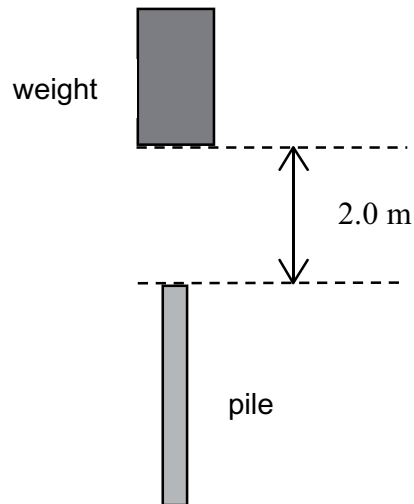


What is the momentum of the object after 8.0 s ?

- A** 20 kg m s^{-1}
- B** 40 kg m s^{-1}
- C** 60 kg m s^{-1}
- D** 80 kg m s^{-1}



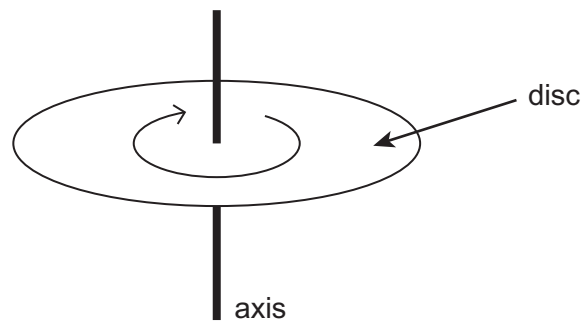
- 3 A pile driver drops a weight of 4900 N through a vertical distance of 2.0 m onto a stationary pile of mass 1500 kg.



The weight does not rebound.

What is the best estimate of the downward speed of the combined masses immediately after the impact?

- A 1.6 m s^{-1}
 B 2.1 m s^{-1}
 C 9.8 m s^{-1}
 D 15 m s^{-1}
- 4 The diagram shows a disc of diameter 120 mm that can turn about an axis through its centre.



The disc is turned through an angle of 30° in a time of 20 ms.

What is the average speed of a point on the edge of the disc during this time?

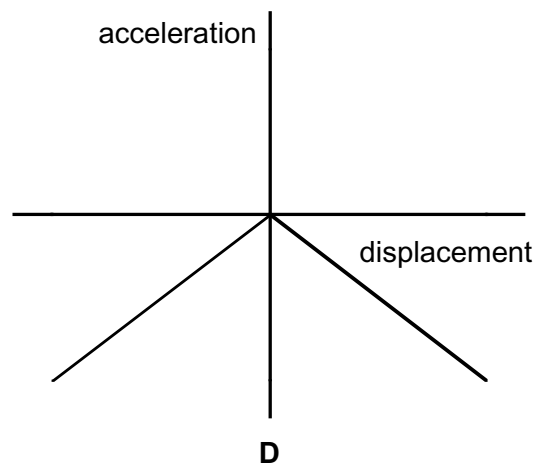
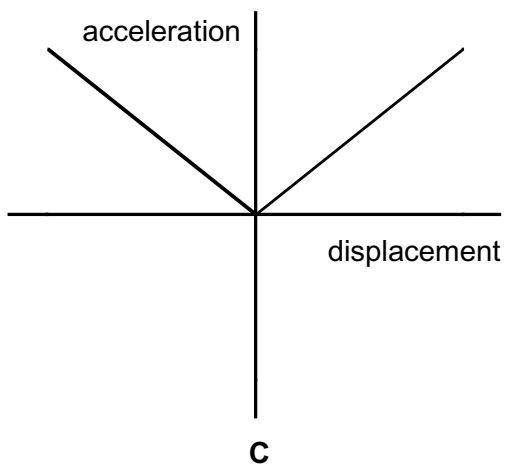
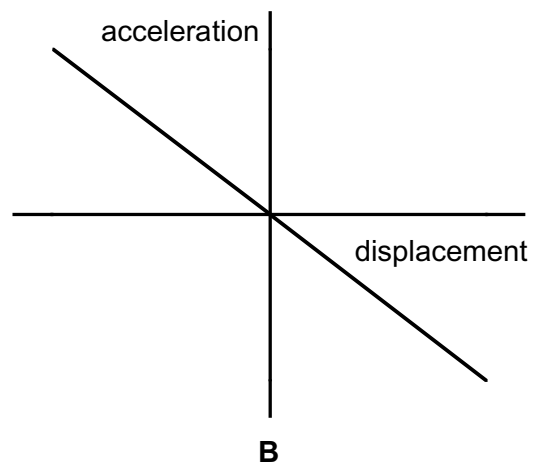
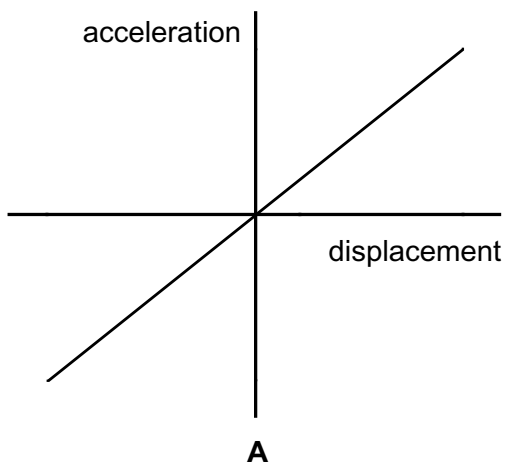
- A $0.5\pi \text{ m s}^{-1}$
 B $\pi \text{ m s}^{-1}$
 C $1.5\pi \text{ m s}^{-1}$
 D $2\pi \text{ m s}^{-1}$

Turn over ►

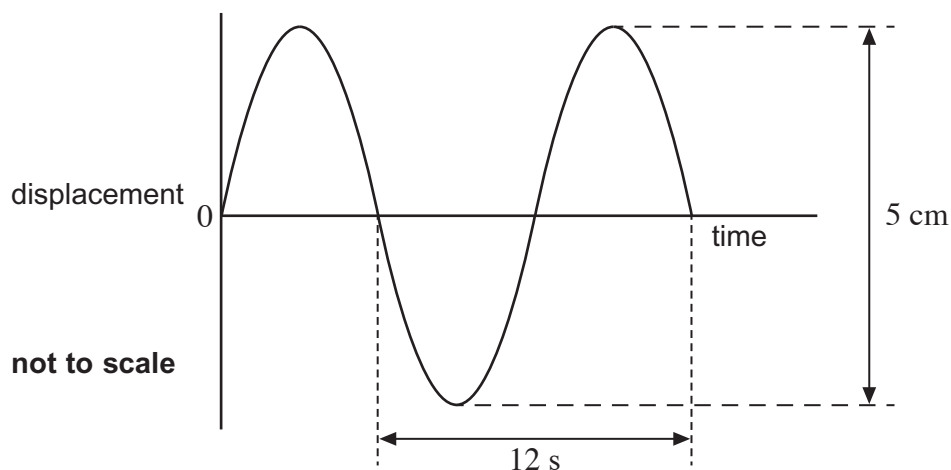


- 5 A mass on the end of a string is whirled round in a horizontal circle at increasing speed until the string breaks. The subsequent path taken by the mass is
- A a straight line along a radius of the circle.
 - B a horizontal circle.
 - C a parabola in a horizontal plane.
 - D a parabola in a vertical plane.

- 6 Which graph best shows the variation in acceleration with displacement for an object performing simple harmonic motion?

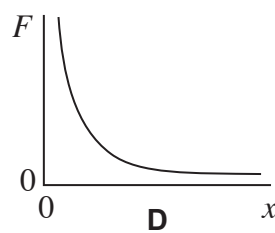
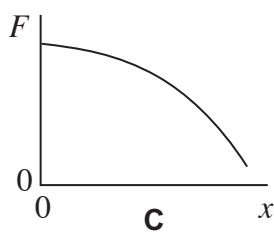
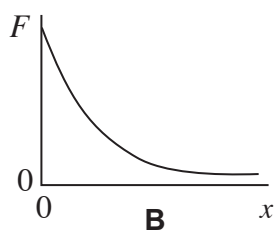
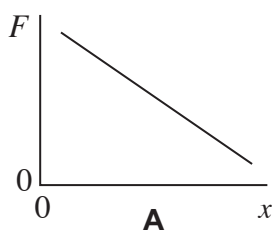


- 7 The graph shows how the displacement varies with time for a body performing simple harmonic motion.



What is the maximum speed of the body?

- A 0.013 m s⁻¹
 B 0.016 m s⁻¹
 C 0.021 m s⁻¹
 D 0.032 m s⁻¹
- 8 A lightly damped system is forced to vibrate at its natural frequency.
 Which statement is **incorrect**?
- A The amplitude of vibration of the driven system is larger than at other frequencies.
 B Energy is transferred from the driving system to the driven system.
 C The driver system's displacement is in phase with the driven system's displacement.
 D Resonance occurs.
- 9 Which graph best shows how the gravitational force F between two point masses varies with the separation x of the masses?



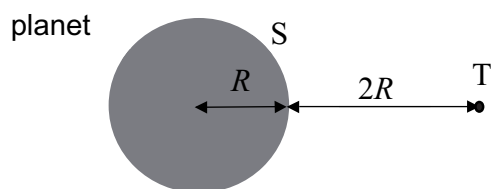
Turn over ►



- 10 The radius of a planet is x times the radius of the Earth. The gravitational field strength at its surface is y times that at the surface of the Earth.

What is the ratio $\left(\frac{\text{mass of the planet}}{\text{mass of the Earth}} \right)$?

- A xy
B x^2y
C xy^2
D x^2y^2
- 11 The gravitational potential at the surface S of a planet of radius R is V . Point T is a distance $2R$ away from the surface.



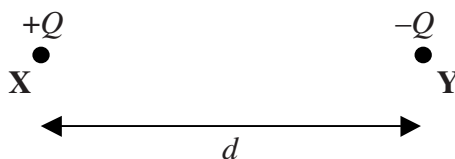
A spacecraft of mass m travels **from T to S**.

What is the change in its gravitational potential energy?

- A It increases by $\frac{mV}{3}$.
B It decreases by $\frac{mV}{3}$.
C It increases by $\frac{2mV}{3}$.
D It decreases by $\frac{2mV}{3}$.



- 12 Two small charged objects **X** and **Y** have charges of $+Q$ and $-Q$ respectively. When they are at a separation d , the force between them is F .



A charge of $+2Q$ is added to each point charge and their separation is increased to $2d$.

Which line, **A** to **D**, in the table gives the magnitude and direction of the force on **X**?

	magnitude	direction
A	$\frac{F}{4}$	towards Y
B	$\frac{3F}{4}$	towards Y
C	$\frac{F}{4}$	away from Y
D	$\frac{3F}{4}$	away from Y

- 13 Which one of the following statements is correct?

The electrical potential V at a point **O** due to a negative charge at **X**

- A** is directly proportional to the distance between **O** and **X**.
- B** can be measured in J C^{-1} .
- C** is independent of the magnitude of the charge placed at **X**.
- D** is a vector quantity.

Turn over for the next question

Turn over ►



14 The relationship between two physical quantities may be inverse, inverse square or exponential.

Which line, **A** to **D**, in the table shows correct relationships for

- (i) pd and time in capacitor discharge
- (ii) electric field strength and distance in a radial field
- (iii) gravitational potential and distance in a radial field?

	(i) capacitor discharge	(ii) electric field strength	(iii) gravitational potential
A	exponential	inverse	inverse square
B	inverse	inverse square	exponential
C	inverse square	exponential	inverse
D	exponential	inverse square	inverse

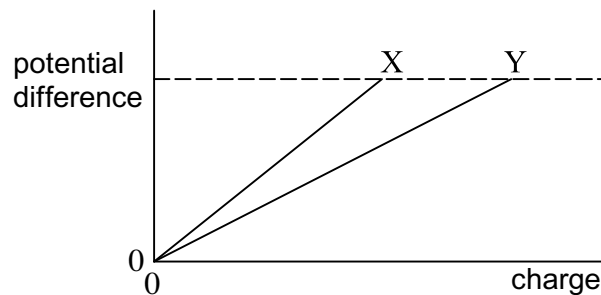


- 15 A capacitor is charged until the potential difference (pd) across it is 12 V. When an additional charge of $36 \mu\text{C}$ is added, the pd increases to 30 V.

Which line, **A** to **D**, in the table gives correct values for the capacitance of the capacitor and for the charge it stored initially?

	capacitance/ μF	initial charge/ μC
A	0.5	24
B	2.0	24
C	0.5	36
D	2.0	36

- 16 The graph shows how the potential differences across capacitors X and Y vary with the charge stored.



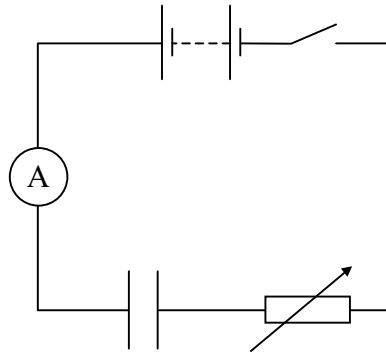
Which line, **A** to **D**, in the table shows correct relationships for the capacitances of X and Y and for the energy they store when at the same potential difference?

	capacitance	energy stored
A	$X > Y$	$X > Y$
B	$X < Y$	$X > Y$
C	$X > Y$	$X < Y$
D	$X < Y$	$X < Y$

Turn over ►



- 17 A capacitor in series with an ammeter is charged through a variable resistor. The capacitor is initially uncharged.



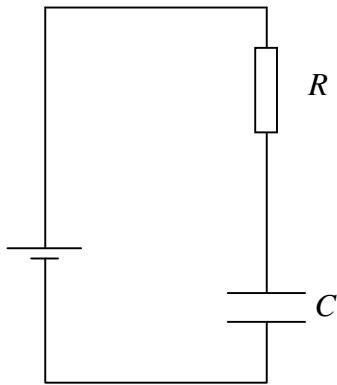
The switch is closed and the variable resistor is continually adjusted to maintain a constant current I for time t . At the end of this time, the pd across the capacitor is V .

What is the energy stored in the capacitor at time t ?

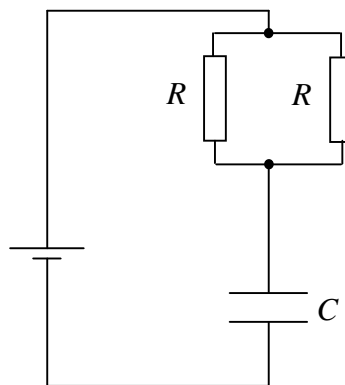
- A $\frac{IVt}{4}$
- B $\frac{IVt}{2}$
- C IVt
- D $2IVt$
- 18 A capacitor with an initial charge of 0.22 mC is discharged through a resistor. The charge falls to 0.10 mC in 10 s.
- What is the time constant for the circuit?
- A 9 s
- B 10 s
- C 13 s
- D 15 s



19

The time constant for circuit X is T .

circuit X



circuit Y

What is the time constant for circuit Y?

- A $\frac{T}{2}$
- B T
- C $2T$
- D $4T$

Turn over for the next question

Turn over ►



20 An electron moving with a constant speed enters a uniform magnetic field in a direction perpendicular to the magnetic field.

What is the shape of the path that the electron follows?

- A** parabolic
- B** circular
- C** elliptical
- D** a line parallel to the magnetic field

21 An electron moves due north in a horizontal plane with uniform speed. It enters a uniform magnetic field directed due south in the same plane.

Which one of the following statements concerning the motion of the electron in the magnetic field is correct?

- A** It is accelerated due west.
- B** It slows down to zero speed and then accelerates due south.
- C** It continues to move north with its original speed.
- D** It is accelerated due north.

22 A proton in a uniform magnetic field of flux density B moves in a circle of radius r at speed v .

What would be the flux density of the field that would keep an α particle moving in a circle of the same radius at the same speed?

- A** $\frac{B}{2}$
- B** B
- C** $2B$
- D** $4B$



- 23 The table shows data for four different rectangular coils.

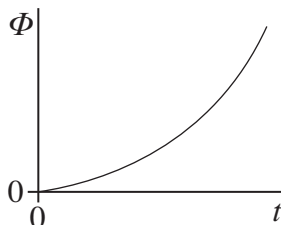
coil	length of longest side/m	length of shortest side/m	number of turns
W	0.05	0.05	2
X	0.10	0.08	20
Y	0.15	0.10	15
Z	0.20	0.12	5

The coils are placed in a uniform magnetic field which acts at right angles to the plane of the coils.

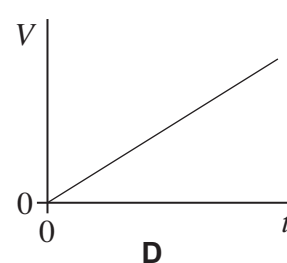
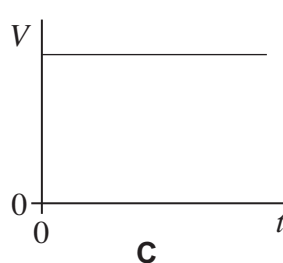
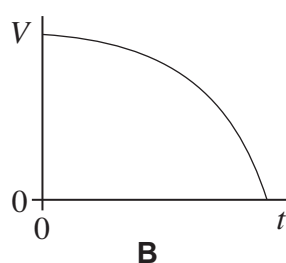
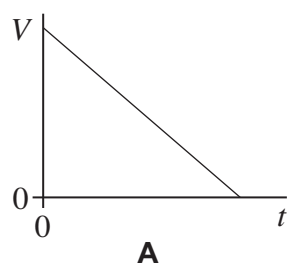
Which one of the following shows the coils arranged in order of greatest to least flux linkage?

- A YXZW
- B XYZW
- C ZYXW
- D WXYZ

- 24 The graph shows how the magnetic flux Φ passing through a coil changes with time t .



Which graph best shows how the magnitude of the emf V induced in the coil varies with t ?

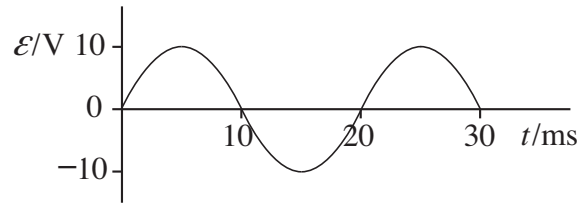


Turn over ►



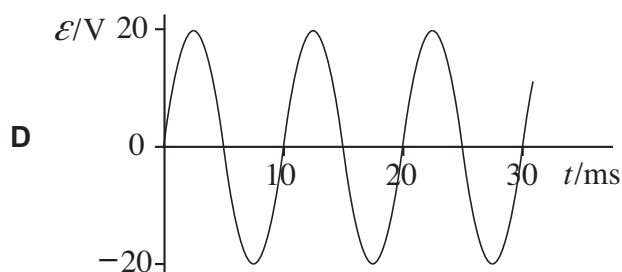
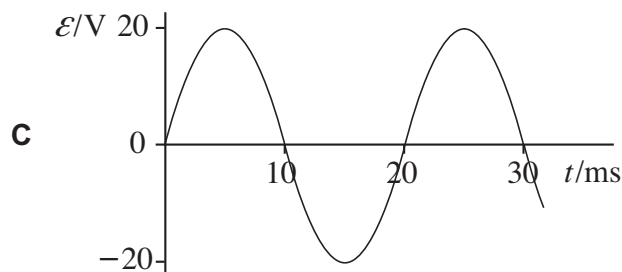
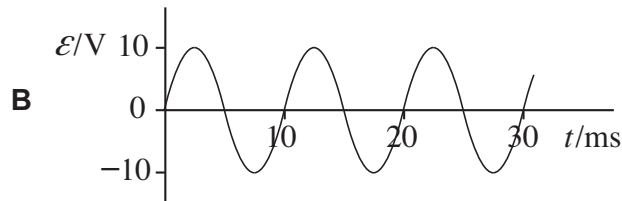
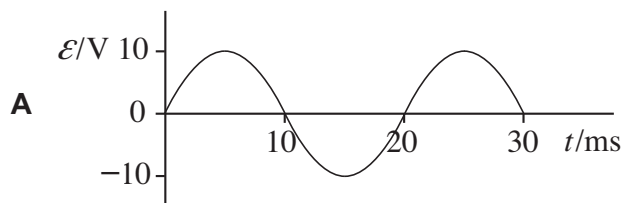
25

The graph shows how the output emf \mathcal{E} varies with time t for a coil rotating at angular speed ω in a uniform magnetic field of flux density B .



The same coil is rotated at angular speed 2ω in a uniform magnetic field of flux density $0.5B$.

Which graph best shows how \mathcal{E} varies with t ?



END OF SECTION A



There are no questions printed on this page

**DO NOT WRITE ON THIS PAGE
ANSWER IN THE SPACES PROVIDED**



There are no questions printed on this page

**DO NOT WRITE ON THIS PAGE
ANSWER IN THE SPACES PROVIDED**

Copyright information

For confidentiality purposes, from the November 2015 examination series, acknowledgements of third party copyright material will be published in a separate booklet rather than including them on the examination paper or support materials. This booklet is published after each examination series and is available for free download from www.aqa.org.uk after the live examination series.

Permission to reproduce all copyright material has been applied for. In some cases, efforts to contact copyright-holders may have been unsuccessful and AQA will be happy to rectify any omissions of acknowledgements. If you have any queries please contact the Copyright Team, AQA, Stag Hill House, Guildford, GU2 7XJ.

Copyright © 2017 AQA and its licensors. All rights reserved.

